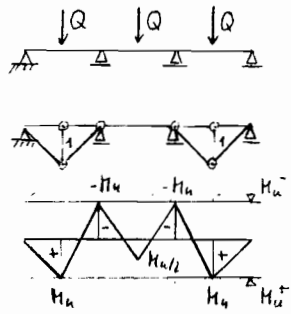


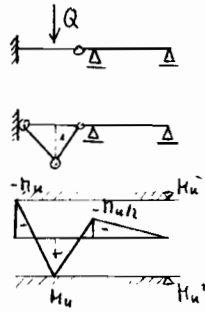
1)

1)



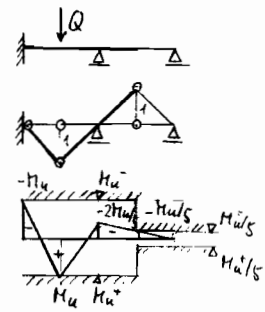
$$Q_u = 6 \frac{M_u}{l}$$

2)



$$Q_u = 7 \frac{M_u}{l}$$

3)



$$Q_u = \frac{34}{5} \frac{M_u}{l}$$

2)

